

KENDRIYA VIDYALAY PATAN

Half Yearly Exam (2018 -19)

SUBJECT : EVS

CLASS : III

NAME OF THE STUDENT : _____ ROLL NO :

DATE :-..... DAY :-..... INVIGILATOR SIGN. :-.....

Competencies	Observation and reporting (30)	Identification and classification (25)	Discovery of facts (25)	Overall Grade(80)
Marks				

CHECKED BY :

OBSERVATION AND REPORTING

VSA (1X10=10)

Q – 1 Observe the following picture and write their names .



1

2.....

3.....



4.....

5.....

6.....



7.....

8.....

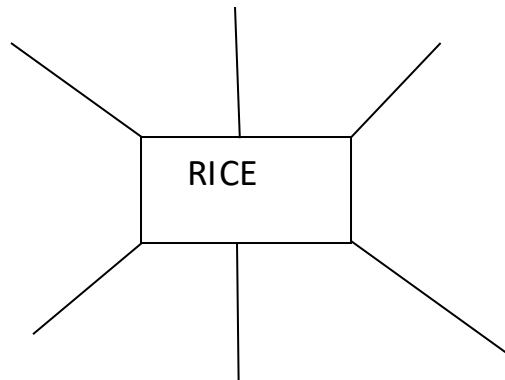
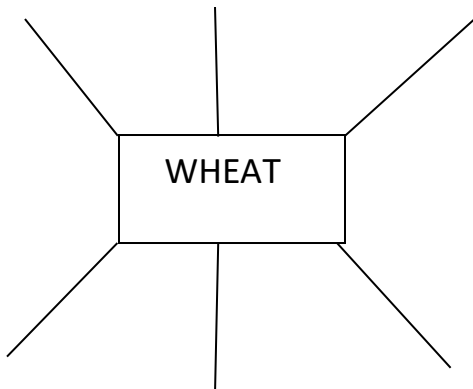
9.....



10.....

Q – 2 Find and write what can be prepared from rice and wheat

5



Q – 3 Write name of the following animals .

5

Can fly _____

Have wings _____

Can hop _____

Can crawl _____

Have tail _____

Q – 4 Write the names of four items that you like to eat:- **1**

- (a) _____ (b) _____
(c) _____ (d) _____

Q – 5 Name the four sense organs : - **1**

- (a) _____ (b) _____
(c) _____ (d) _____

Q – 6 Write the two activities you can do without water. **1**

- (a) _____ (b) _____

Q -7 Write the two activities you cannot do without water . **1**

- (a) _____ (b) _____

Q – 8 What you call these persons ? **1**

1. A person who cannot see
2. A person who cannot speak.....


Q- 9 Draw picture of any two animal , colour and name it . **5**

IDENTIFICATION AND CLASSIFICATION

Q – 1) write ‘ T ‘ for and ‘ F ‘ for false statement . **5**

- 1 . We cannot live without water
- 2 Dogs can walk , run and fly .
- 3 Trees are smaller than plant.
- 4 Ammu and shabnam also wanted to be the plant faiy.

5 Appu likes mangoes .



Q -2 Answers the following question given below.

5

- 1 . What is our national fruit ?
- 2 . Write the name of vegetables
- 3 What is our national tree ?
- 4 What is our national animal ?
- 5 What is our national bird ?

Q – 3 Answer the following question .

10

1 How did chhotu use the pipe ?

Ans.....
.....

2 Write the names of names of the different parts of youre house ?

Ans.....
.....

3 Why did appu pour water on the banana tree ?

Ans.....
.....

4 From where do plants mostly get water ?

Ans.....
.....

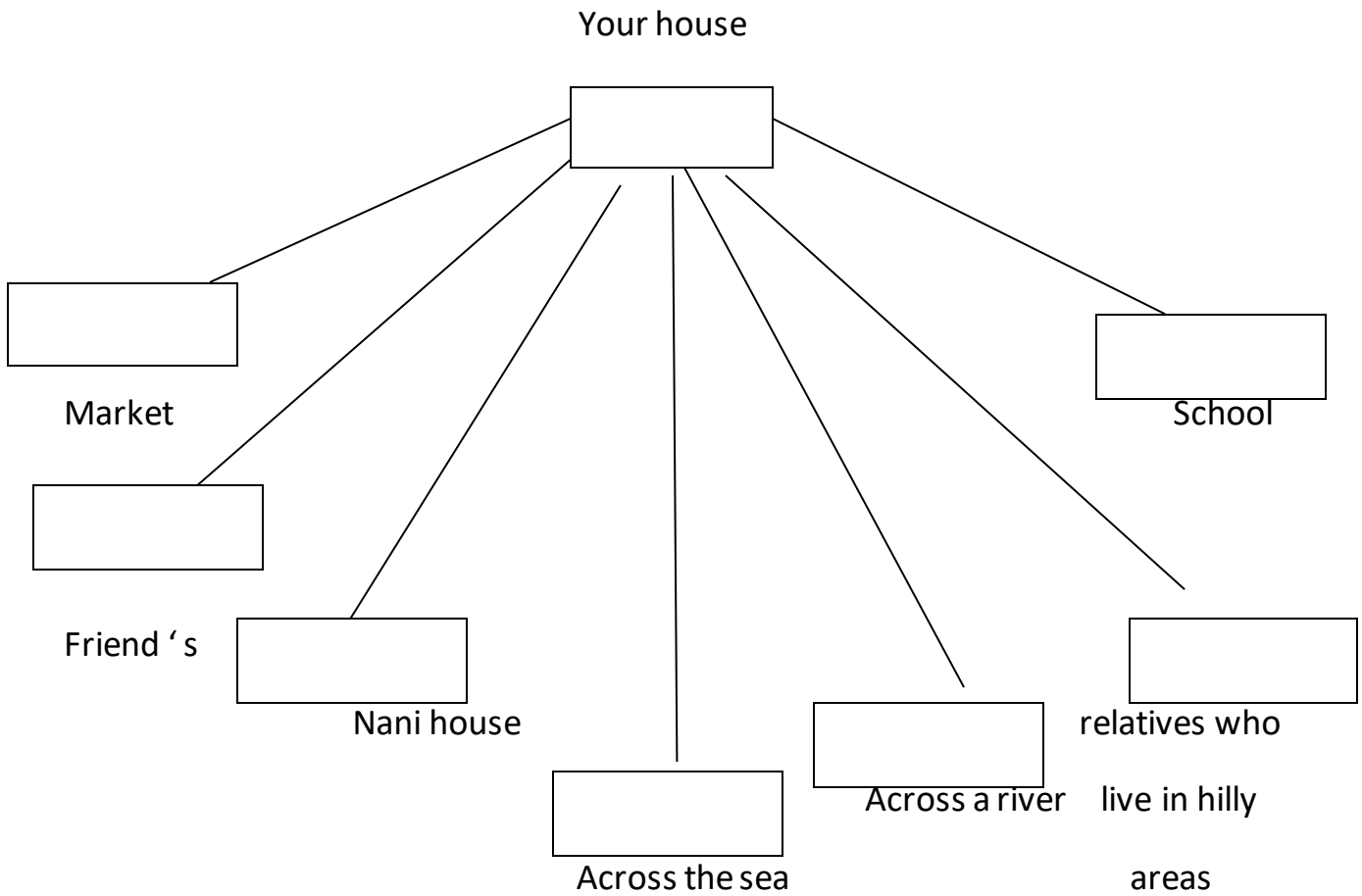
5 Do you help the family with the work ?

Ans.....

Q- 4 How would you choose to go from you house to go the place written below ?

write into box -

5



DISCOVERY OF FACTS

1 Name any two flower plant .

2

(a) _____ (b) _____

2 .Write the name of insects

2

(a) _____ (b) _____

3 .Name two kinds of food that we get from animals .

2

(a) _____ (b) _____

4 . Fill in the blank :-

2

(a) Doctors work in _____

(b) Post-man work in _____

5 . Who does the given work in your family : - 2

(a) cooks food _____

(b) Bring things from the market _____

Q – 2 Circle the odd one out . 5

(1) Bedroom bed , dressing table , Almiraah ,stove


(2) kitchen Fridge , Utensils , bucket ,gas stove,

(3) Fly Parrot , pigeon , crow , tiger

(4) Drawing room Television , shower , sofa ,table

(5) Wheat Thepala , roti , puri , burger

Q- 3, Given in the grid are some place where water is found . find any five of

Them and put  a around each . 5

W	A	T	E	R	F	A	L	L
E	L	A	K	E	R	P	X	Q
L	S	E	A	S	A	O	M	T
L	W	I	Q	Y	I	N	N	A
X	W	E	L	L	N	D	Y	P

Q – 4 .Draw two sources of water and write its name also : 5

--	--